
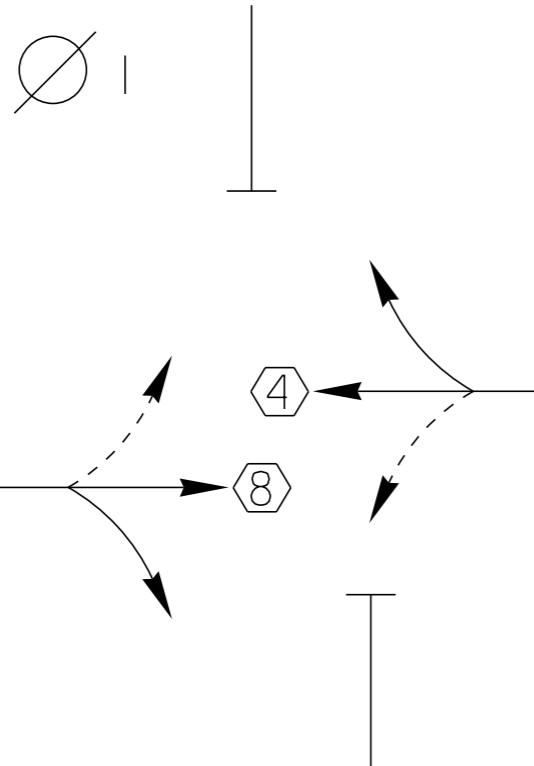
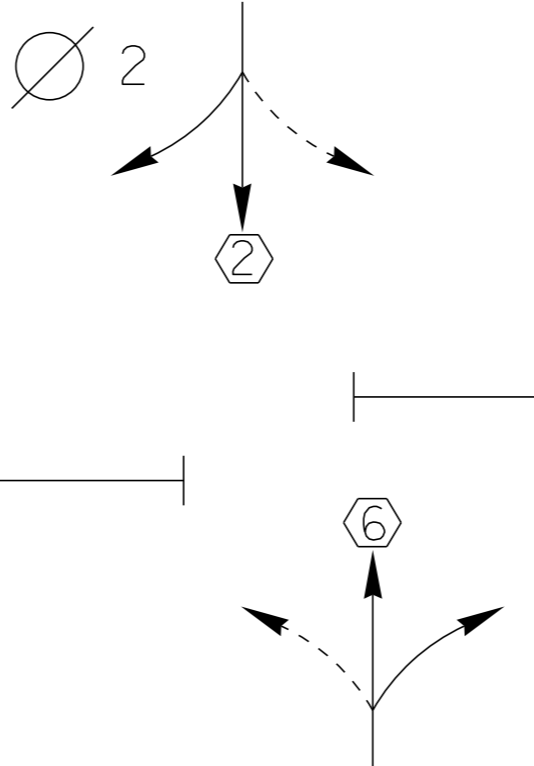
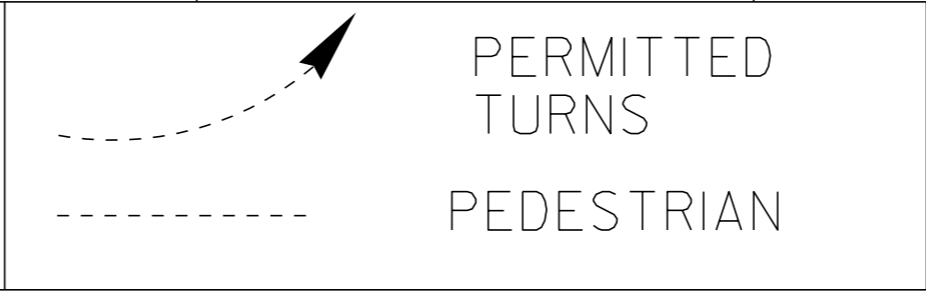
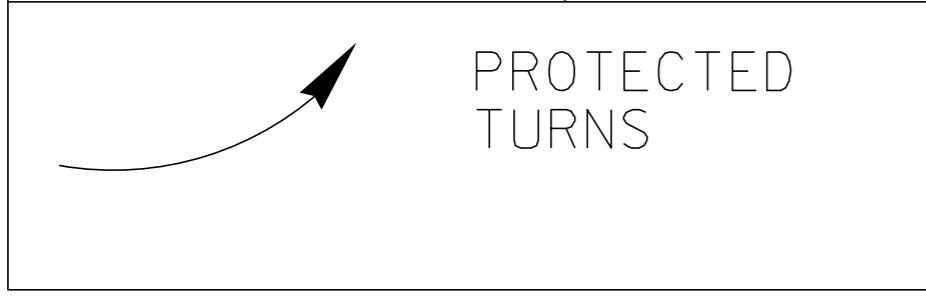


<p style="writing-mode: vertical-rl; transform: rotate(180deg);">D I A G R A M</p> 	<p>Ø 1</p> 	<p>Ø 2</p> 	<p>Ø 3</p>	<p>Ø 4</p>
<p>TIMING</p>	<p>G = Y =</p>	<p>G = Y =</p>	<p>G = Y =</p>	<p>G = Y =</p>
<p style="writing-mode: vertical-rl; transform: rotate(180deg);">D I A G R A M</p>	<p>Ø 5</p>	<p>Ø 6</p>	<p>Ø 7</p>	<p>Ø 8</p>
<p>TIMING</p>	<p>G = Y =</p>	<p>G = Y =</p>	<p>G = Y =</p>	<p>G = Y =</p>



CYCLE LENGTH, C= _____ S